





The Collection

Solve each of the multiplication problems below and then draw that many eggs on each leaf.



Solve each multiplication problem and color the number of eggs that correspond to your answer.



Solve each word problem below.

Ladybug Jones laid 10 eggs. She laid 3 less male eggs than female eggs. How many male eggs did she lay?

Ladybug Rivers laid 16 eggs during the spring and 11 during the summer. How many total eggs did she lay?