

# The BK Collection

Ladybugs can lay between 5 and 50 eggs per cluster. Sometimes, they lay an odd number of eggs, and sometimes they lay an even number of eggs. Remember, an odd number cannot be evenly divided by 2, but even numbers can. Count the number of eggs in each cluster and write on the line whether it is an odd or even amount.

Example:



three

odd



five

\_\_\_\_\_



one

\_\_\_\_\_



two

\_\_\_\_\_




four

\_\_\_\_\_




six

\_\_\_\_\_




ten

\_\_\_\_\_



nine

\_\_\_\_\_




seven

\_\_\_\_\_



eleven

\_\_\_\_\_



eight

\_\_\_\_\_